



This task will allow you to look examples of erosion and associated landforms from different parts of the UK.

<p>Mild</p>		<p>Choose one feature of coastal erosion from around the UK. Choose from:</p> <ul style="list-style-type: none"> • Headlands • Bays • Stacks • Arches <p>Complete the following:</p> <ol style="list-style-type: none"> 1. Find and print a picture of that feature of coastal erosion 2. Write a sentence to describe its location 3. Name the feature(s) seen in the picture 4. Write three sentences to explain how each feature was formed.
<p>Medium hot</p>		<p>Choose two features of coastal erosion from around the UK. Choose from:</p> <ul style="list-style-type: none"> • Headlands • Bays • Stacks • Arches <p>Complete the following:</p> <ol style="list-style-type: none"> 1. Find and print a picture of each of the two features of coastal erosion 2. Write a sentence and include a map to describe the location of the coastal erosion features 3. Label the features seen in each picture 4. Write a short paragraph to explain how each of the features was formed.



<p>Hot and spicy</p>		<p>Locate three features of coastal erosion on a map of the UK. Choose from:</p> <ul style="list-style-type: none"> • Headlands • Bays • Caves • Arches • Stacks <p>Complete the following:</p> <ol style="list-style-type: none"> 1. Print maps to show the location of each feature 2. Write a short description to describe where each feature is located 3. Find and label images of each of the three features 4. Explain the formation sequence of caves, arches, stacks and stumps.
<p>Very hot and extra spicy</p>		<p>Locate three or more features of coastal erosion from around the UK. Choose from:</p> <ul style="list-style-type: none"> • Caves • Arches • Stacks • Stumps • Wave-cut platforms <p>Complete the following:</p> <ol style="list-style-type: none"> 1. Print maps to show the location of each feature 2. Write a short description to describe where each feature is located 3. Find and label images of each feature 4. Explain the formation sequence of caves, arches, stacks and stumps. You should refer to specific erosion processes in your explanation 5. Explain the formation of a wave cut platform.

Image of chilli pepper used under the Creative Commons Attribution-Share Alike 3.0 Unported license. © Stephen Bain 2006 commons.wikimedia.org/wiki/File:Chilli_pepper_1.svg