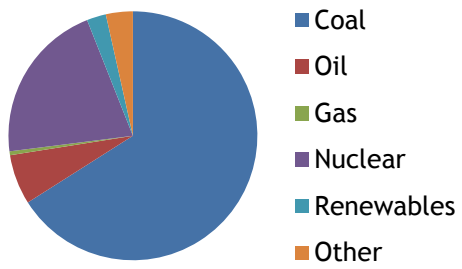
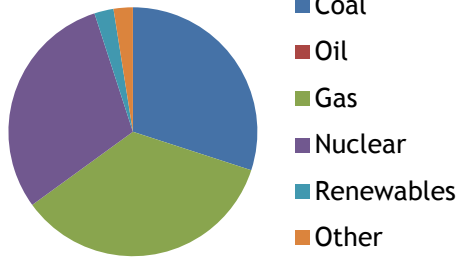
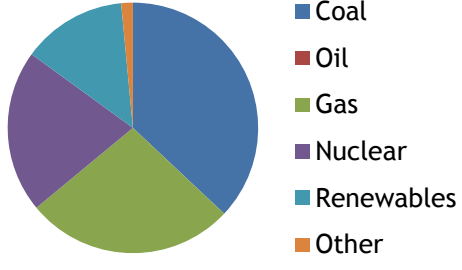


**Student task:**

Look at the three pie charts which show the UK's energy mix in three different years.

1. Describe each pie chart.
2. In a paragraph at the bottom, compare the three pie charts.

**Challenge:** Can you give any reasons for the changes that you have identified?

<p style="text-align: center; font-weight: bold; font-size: 1.2em;">1990</p>  <ul style="list-style-type: none"> <li><span style="color: blue;">■</span> Coal</li> <li><span style="color: red;">■</span> Oil</li> <li><span style="color: green;">■</span> Gas</li> <li><span style="color: purple;">■</span> Nuclear</li> <li><span style="color: lightblue;">■</span> Renewables</li> <li><span style="color: orange;">■</span> Other</li> </ul>	<p>.....</p> <p>.....</p> <p>.....</p> <p>.....</p> <p>.....</p> <p>.....</p> <p>.....</p>
<p style="text-align: center; font-weight: bold; font-size: 1.2em;">2007</p>  <ul style="list-style-type: none"> <li><span style="color: blue;">■</span> Coal</li> <li><span style="color: red;">■</span> Oil</li> <li><span style="color: green;">■</span> Gas</li> <li><span style="color: purple;">■</span> Nuclear</li> <li><span style="color: lightblue;">■</span> Renewables</li> <li><span style="color: orange;">■</span> Other</li> </ul>	<p>.....</p> <p>.....</p> <p>.....</p> <p>.....</p> <p>.....</p> <p>.....</p> <p>.....</p>
<p style="text-align: center; font-weight: bold; font-size: 1.2em;">2014</p>  <ul style="list-style-type: none"> <li><span style="color: blue;">■</span> Coal</li> <li><span style="color: red;">■</span> Oil</li> <li><span style="color: green;">■</span> Gas</li> <li><span style="color: purple;">■</span> Nuclear</li> <li><span style="color: lightblue;">■</span> Renewables</li> <li><span style="color: orange;">■</span> Other</li> </ul>	<p>.....</p> <p>.....</p> <p>.....</p> <p>.....</p> <p>.....</p> <p>.....</p> <p>.....</p>
<p>.....</p> <p>.....</p> <p>.....</p> <p>.....</p> <p>.....</p> <p>.....</p>	